

Series : P1QSR

SET~1



प्रश्न-पत्र कोड
Q.P. Code

57/1/1

रोल नं.

Roll No.

2	3	7	1	3	6	1	2
---	---	---	---	---	---	---	---

परीक्षार्थी प्रश्न-पत्र कोड को उत्तर-पुस्तिका के मुख-पृष्ठ पर अवश्य लिखें।

Candidates must write the Q.P. Code on the title page of the answer-book.



जीव विज्ञान (सैद्धान्तिक)



BIOLOGY (Theory)

निर्धारित समय : 3 घण्टे

Time allowed : 3 hours

अधिकतम अंक : 70

Maximum Marks : 70

नोट	{ }	NOTE
(I) कृपया जाँच कर लें कि इस प्रश्न-पत्र में मुद्रित पृष्ठ 23 हैं।		(I) Please check that this question paper contains 23 printed pages.
(II) प्रश्न-पत्र में दाहिने हाथ की ओर दिए गए प्रश्न-पत्र कोड को परीक्षार्थी उत्तर-पुस्तिका के मुख-पृष्ठ पर लिखें।		(II) Q.P. Code given on the right hand side of the question paper should be written on the title page of the answer-book by the candidate.
(III) कृपया जाँच कर लें कि इस प्रश्न-पत्र में 33 प्रश्न हैं।		(III) Please check that this question paper contains 33 questions.
(IV) कृपया प्रश्न का उत्तर लिखना शुरू करने से पहले, उत्तर-पुस्तिका में यथास्थान पर प्रश्न का क्रमांक अवश्य लिखें।		(IV) Please write down the serial number of the question in the answer-book at the given place before attempting it.
(V) इस प्रश्न-पत्र को पढ़ने के लिए 15 मिनट का समय दिया गया है। प्रश्न-पत्र का वितरण पूर्वाह्न में 10.15 बजे किया जाएगा। 10.15 बजे से 10.30 बजे तक परीक्षार्थी केवल प्रश्न-पत्र को पढ़ेंगे और इस अवधि के दौरान वे उत्तर-पुस्तिका पर कोई उत्तर नहीं लिखेंगे।		(V) 15 minute time has been allotted to read this question paper. The question paper will be distributed at 10.15 a.m. From 10.15 a.m. to 10.30 a.m., the candidates will read the question paper only and will not write any answer on the answer-book during this period.

General Instructions :

Read the following instructions carefully and follow them :

- (i) This question paper contains 33 questions. All questions are compulsory.
- (ii) Question paper is divided into FIVE sections – Section A, B, C, D and E.
- (iii) Section A – questions number 1 to 16 are multiple choice type questions. Each question carries 1 mark.
- (iv) Section B – questions number 17 to 21 are very short answer type questions. Each question carries 2 marks.
- (v) Section C – questions number 22 to 28 are short answer type questions. Each question carries 3 marks.
- (vi) Section D – questions number 29 and 30 are case-based questions. Each question carries 4 marks. Each question has subparts with internal choice in one of the subparts.
- (vii) Section E – questions number 31 to 33 are long answer type questions. Each question carries 5 marks.
- (viii) There is no overall choice. However, internal choices have been provided in some questions. A candidate has to write answer for only one of the alternatives in such questions.
- (ix) Kindly note that there is a separate question paper for Visually Impaired candidates.
- (x) Wherever necessary, neat and properly labelled diagrams should be drawn.

SECTION – A

Question Nos. 1 to 16 are Multiple Choice Type Questions, carrying 1 mark each. Choose the best option.

1. Identify the plant in which emasculation is not required for artificial hybridization. 1
(A) Rice (B) Wheat
(C) Pea (D) Papaya
2. Which of the following is not a component of immune system ? 1
(A) Lymphocytes (B) Plasma Proteins
(C) Red Blood Cells (D) Bone Marrow

3. Select the option that shows correct statements :

1

- (i) Corpus luteum secretes progesterone.
- (ii) Only FSH attains a peak level in middle of cycle.
- (iii) LH surge induces rupture of graafian follicle.
- (iv) Luteal phase of menstrual cycle is also called proliferative phase.

Options :

- (A) Only (ii) is correct.
- (B) (i) and (iii) are correct.
- (C) Only (iv) is correct.
- (D) (ii) and (iv) are correct.

4. Select the mismatched pair :

1

- (A) Mega diversity countries in the world – 12
- (B) Genetically different strains of rice in India – Less than 1000
- (C) Robert Mays estimation on global species diversity – 7 million species worldwide
- (D) Zoological parks – Ex-situ conservation

5. Pomato was produced by fusing protoplasts of

1

- (A) Tomato and Potato
- (B) Pomegranate and Tomato
- (C) Pomegranate and Potato
- (D) Pomegranate, Potato and Tomato

6. In an ecosystem, different species occupy different levels and vertical distribution of species is found. This is called _____.

1

- (A) Stratification
- (B) Layering
- (C) Fragmentation
- (D) Population

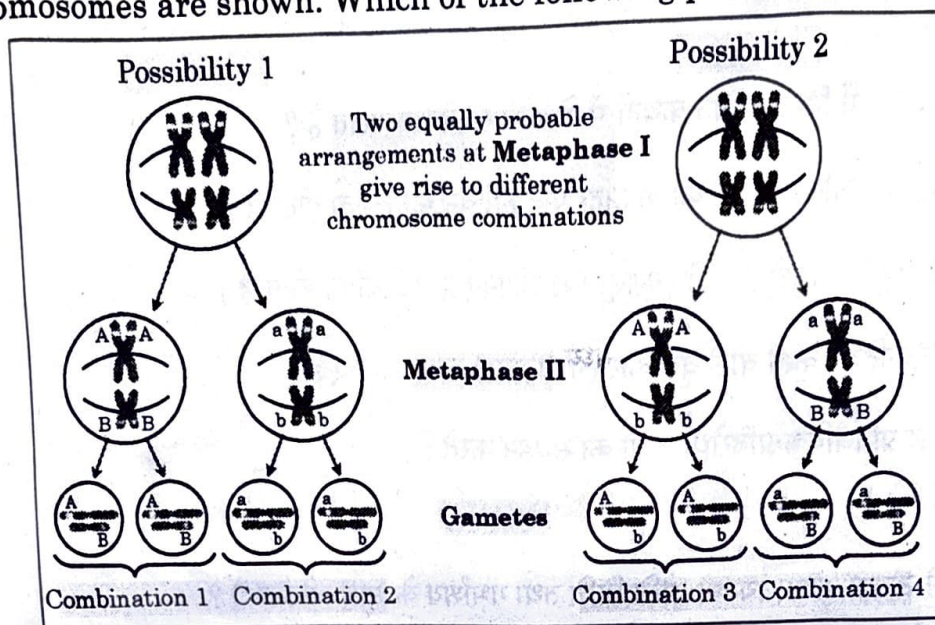
7. Which of the following sacred groves is found in Meghalaya ?

1

- (A) Jaintia hills (B) Bastar
(C) Chanda (D) Sarguja

8. In the following figure, two ways of pairing of two homologous pairs of chromosomes are shown. Which of the following phenomena is expressed ?

1



- (A) Linkage of genes (B) Independent assortment of genes
(C) Multiple alleles (D) Incomplete dominance

9. Match Column-I with Column-II and choose the correct option :

1

Column-I	Column-II
a. Biolistic gun	i. Bacterial cell
b. Chitinase	ii. Tumour inducing
c. Ti	iii. Animal cell
d. Ca^{++}	iv. Fungal cell
	v. Plant cell

Options :

a	b	c	d
(A) i	ii	iii	iv
(B) ii	v	i	iii
(C) v	iv	ii	i
(D) v	i	iv	ii

10. The idea of use and disuse of organs for evolution of organism was proposed by 1

- (A) Charles Darwin
- (B) Thomas Malthus
- (C) Hugo De Vries
- (D) Lamarck

11. Which of the following statements about plasmids is incorrect ? 1

- (A) Plasmids have the ability to replicate within the bacterial cell.
- (B) Their replication is controlled by chromosomal DNA.
- (C) They are autonomously replicating circular extra-chromosomal DNA.
- (D) They often carry antibiotic resistant genes.

12. Which connective tissue connects ovary to pelvic wall and uterus ? 1

- | | |
|---------------|---------------|
| (A) Tendons | (B) Ligaments |
| (C) Cartilage | (D) Bone |

For Questions number 13 to 16, two statements are given – one labelled as Assertion (A) and the other labelled as Reason (R). Select the correct answer to these questions from the codes (A), (B), (C) and (D) given below :

- (A) Both Assertion (A) and Reason (R) are true and Reason (R) is the correct explanation for Assertion (A).
- (B) Both Assertion (A) and Reason (R) are true, but Reason (R) is not the correct explanation for Assertion (A).
- (C) Assertion (A) is true, but Reason (R) is false.
- (D) Assertion (A) is false, but Reason (R) is true.

13. **Assertion (A)** : The population of melanized moths increased in industrial areas after Industrial Revolution.
- Reason (R)** : In Industrial environment lichen covered trees were replaced by soot-covered trees offering better camouflage to dark coloured moths. 1
14. **Assertion (A)** : The milk produced by transgenic cow 'Rosie' was nutritionally more balanced product for human babies than natural cow milk.
- Reason (R)** : It was human protein enriched milk containing human alpha lactaglobulin. 1
15. **Assertion (A)** : Flocs are masses of bacteria associated with fungal filaments in secondary treatment of sewage.
- Reason (R)** : Flocs help in digestion of solid waste by anaerobic respiration. 1
16. **Assertion (A)** : In terrestrial ecosystem much larger fraction of energy flows through grazing food chain.
- Reason (R)** : Grazing food chain may be connected to Detritus food chain at some levels. 1

SECTION - B

17. (a) Define Humoral immune response. 1
- (b) Name any two types of antibodies found to give humoral immune response in humans. 1
18. (a) (i) How does a farmer use dormancy of seed to his advantage? 1
- (ii) Differentiate between pea seed and castor seed. 1

OR

- (b) Identify the stage of follicle where primary oocyte undergoes first meiotic division.

Also mention the products of this division. 2

19. Study the sequence of bases in a DNA molecule that is shown below and answer the questions.

5' – GAATTC – 3'

3' – CTTAAG – 5'

- (a) What are such sequences called ? Name the enzyme used that recognises such nucleotide sequences. 1
- (b) How do these enzymes function ? 1

20. (a) Analyse the following two cases of sex determination in different organisms :

Case I : Males have (XO) sex chromosomes and females have two copies of same sex chromosome (XX).


Case II : Females have two different sex chromosomes (ZW) and males have two copies of same sex chromosome (ZZ).

Identify the type of heterogamety in each case, giving one example of each. 1 + 1'

OR

- (b) (i) Differentiate between a DNA and RNA nucleotide. 1
- (ii) Name the two types of bonds present within a single nucleotide. 1

21. (a) Given below is a pyramid found in an ecosystem, where each bar represents the standing crop available in the trophic level.



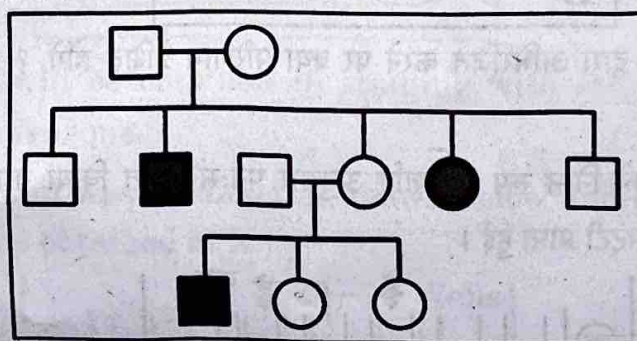
- (i) Identify the kind of pyramid and with the help of an example explain the conditions where this kind of pyramid is possible in nature. 1
- (ii) Write any two limitations of ecological pyramids. 1

OR

- (b) In an ecosystem there was loss of biodiversity due to some project in that area.
- (i) How will biodiversity be affected ? (2 points) 1
- (ii) List two major causes of loss of biodiversity. 1

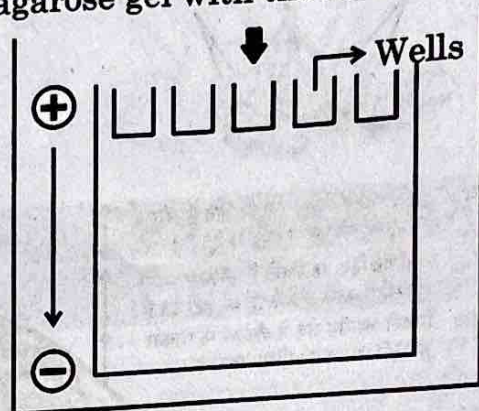
SECTION - C

22. (a) Do all pollen grains remain viable for the same length of time ?
Support your answer with two suitable examples. 2½
- (b) How are pollen grains stored in pollen banks ? ½
23. (a) What is pedigree analysis ? Mention its importance in human genetics. (2 pts.) 1 + 1
- (b) Analyse the following pedigree and write the
- (i) Pattern of inheritance. ½
- (ii) Give one example of disease showing such an inheritance pattern. ½

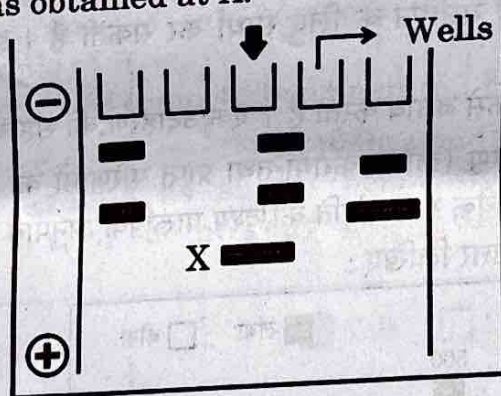


24. (a) How is Hardy-Weinberg expression $(p^2 + 2pq + q^2) = 1$ derived ? 2
- (b) List any two factors that disturb the genetic equilibrium. 1
25. Draw a neat diagram of megasporangium of an angiosperm and label any six parts. ½ × 6 = 3
26. (a) Mention the scientific name of the source plant and the part from which opioids are extracted. 1
- (b) How are morphine and heroin related ? Mention the effect each one of them has on human body. 2
27. A farmer grew two varieties of corn crop in field A and B. He grew normal corn crops in field A and GM corn crops in field B. He observed that corn borers attacked only in field A. To control it, spores of Bt were sprayed on field A.
- (a) Name the gene in the spores responsible for control of pest. ½
- (b) What effect will the spores of Bt have on insect pest ? 1½
- (c) How has corn plants of field B developed resistance against this pest ? Explain. 1

28. Observe the given picture carefully. A mixture of DNA with fragments ranging from 100 base pairs to 1800 base pairs were separated by electrophoresis on agarose gel with the following arrangement :



- (a) What result will be obtained in staining with ethidium bromide ? Explain with reasons. 1
- (b) The above setup was modified as shown below and a band with 100 base pairs was obtained at X. 2



What changes were made to the previous design to get a band at 'X'. Why did the band appear at 'X' ?

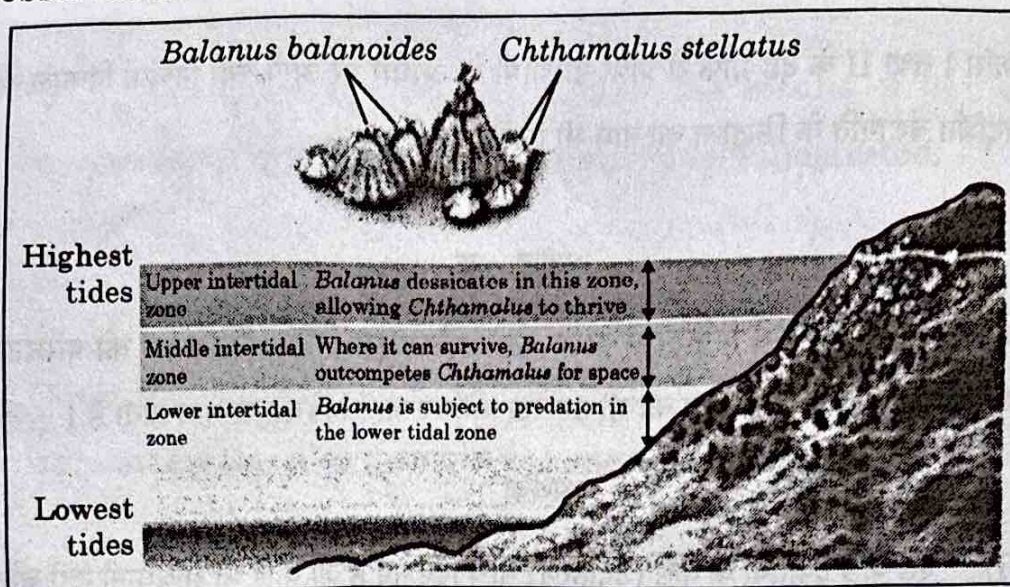
SECTION - D

Question Nos. 29 and 30 are case-based questions. Each question has sub-sections with internal choice in one sub-section.

29. The diagram below shows the distribution of two barnacle species, *Chthamalus* and *Balanus* on a rocky sea shore.

When *Balanus* is experimentally removed, *Chthamalus* expands its range in lower intertidal zone.

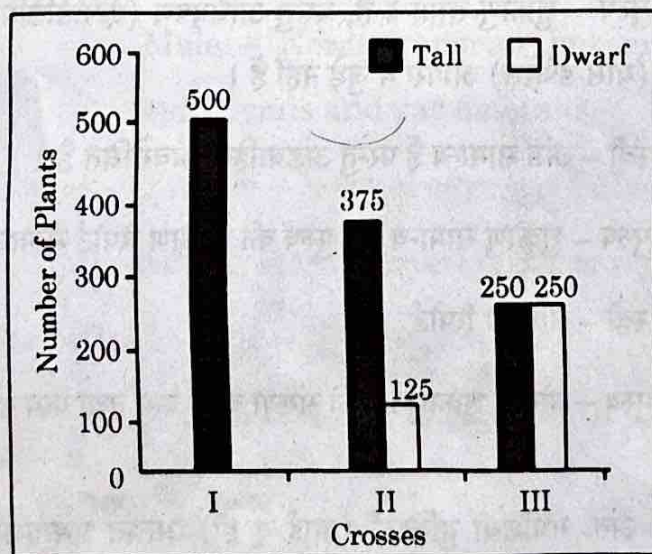
- (a) Identify and define the ecological phenomenon demonstrated by this observation. 1



OR

- (a) State the principle that explains the elimination of one species. 1
 (b) Two different species can compete for the same resource. Give another example of it. 1
 (c) How do species avoid competition in nature? Explain with an example. 2

30. A student performed some crosses in plants and represented the result in the form of bar graphs as shown below. Each graph displays the phenotypic proportion of the progeny. Study the graphs and answer the questions :



- (a) What can you infer about the genotype of parents in crosses I and II? 1

OR

- (a) Which genetic cross is represented by these crosses? 1

(b) Looking at bar graph of cross III, identify the type of cross performed and its importance in genetics. 2

(c) What conclusion can you draw from the results of bar graphs of crosses I and II? Name the genetic principle illustrated. 1

SECTION - E

31. (a) Trace the events from fertilization till implantation of blastocyst in human female. Also mention the site where fertilization takes place. 5

OR

(b) (i) Case studies of some couples are given below. They were not able to have kids even though the parents were not taking any precautions. They also do not wish to adopt a child or take the help of donors. Study these cases and suggest an appropriate Assisted Reproductive Technology that could help them.

Case I - Female - Normal Reports

Male - Normal sperms but no connection between epididymis and vas deferens. 1

Case II - Female - Normal eggs but Fallopian tube blocked.

Male - Normal sperms. Male reports are normal. 1

Case III - Female - Normal Reports.

Male - Low sperm count with less motility. 1

(ii) Copper releasing intrauterine devices are very effective and popular contraceptive devices. Name any two copper releasing IUDs. Write two reasons that make them effective contraceptives. 2